

Chapter 1**Measurements****Short Answers**

Q.1 Name several repetitive phenomenon occurring in nature which could serve as reasonable time standards.

Ans. 1) Revolution of earth around sun.
2) Revolution of the moon around the earth.
3) Human pulse rate.
4) Characteristic vibrations of quartz crystals.

Q.2 Give the draw backs to use the period of a pendulum as a time standard.

Ans. Time period of the pendulum is given by the formula

$$T=2\pi (l/g)^{1/2}$$

Following are the draw backs to use the period of a pendulum as time standard:

- i. The environmental changes may affect its length.
- ii. The value of g is not constant every where due to change of height.
- iii. The point of suspension can never be frictionless.
- iv. The frictional effects due to air currents changes the time period.



Q.3 Why do we find it useful to have two units for the amount of substance, the kilogram and the mole?

Ans. Kilogram measures quantity of a substance having relatively large mass. Mole is used to count the number of atoms/molecules in a substance. One mole of every substance has same number of atoms/molecules whereas one kg has different number of atoms / molecules in every substance.

Q.4 Three students measured the length of a needle with a scale on which minimum division is 1mm and recorded as (i) 0.2145 m (ii) 0.21 m (iii) 0.214 m which record is correct and why?

Ans. 1 mm = 1 / 1000 m = 0.001 m. Answer (iii) 0.214 m is correct because the least count of meter rod is up to 3 decimal point.

Q.5 An old saying is that "A chain is only as strong as its weakest link". What analogous statement can you make regarding experimental data used in a computation?

Ans. The analogous statement regarding experimental data may be "The experimental result is as accurate as the least accurate measurement in the experimental data".

Q.6 The period of simple pendulum is measured by a stop watch. What types of errors are possible in the time period?

Ans. The following errors are possible:

- 1) The zero error due to faulty apparatus (systematic error).
- 2) The error due parallax.
- 3) The human reflections or inexperience or negligence.
- 4) Frictional effects due to air and support.

Q.7 Does a dimensional analysis give any information about constant of proportionality that may appear in an algebraic expression? Explain.

Ans. No dimensional analysis does not give any information about constant of proportionality. It is used to derive the physical quantities appearing in the algebraic expression. The numerical value of the constant of proportionality can be determined by experiments. For example in deriving the formula for time period of simple pendulum, $T=2\pi (l/g)^{1/2}$ '1' and 'g' is given by dimensional analysis but 2π cannot be calculated by dimensional analysis.

Q.8 Write the dimensions of (i) Pressure, (ii) Density

Ans. (i) Dimensions of Pressure = dimensions of Force / dimensions of area

$$[F] = [m a] = [M L T^{-2}]$$

$$[A] = [L^2]$$

$$[P] = [F]/[A]$$

$$= [M L T^{-2}]/[L^2]$$

$$= [M L^{-1} T^{-2}]$$

(ii) dimensions of density = dimensions of mass / dimensions of volume

$$[D] = [\text{mass}]/[\text{vol}]$$

$$= [M L^{-3}]$$

Q.9 *The wavelength λ of a wave depends on the speed v of the wave and its frequency f . Knowing that*

$$[\lambda] = [L], [v] = [L T^{-1}] \text{ and } [f] = [T^{-1}]$$

Decide which of the following is correct, $f = v \lambda$ or $f = v / \lambda$

Ans. Applying dimensional analysis:

$$\text{Dimensions of } f = [T^{-1}] \dots (1)$$

$$\text{Dimensions of } v\lambda = [L T^{-1}] \times [L] = [L^2 T^{-1}] \dots (2)$$

From equation (1) and (2)

$$[T^{-1}] \neq [L^2 T^{-1}]$$

So it is dimensionally not correct.

$$\text{Now dimensions of } f = [T^{-1}] \dots (3)$$

$$\text{And dimensions of } v / \lambda = [L T^{-1}] / [L] = [T^{-1}] \dots (4)$$

From equation (3)&(4)

$$[T^{-1}] = [T^{-1}]$$

So it is dimensionally correct.



Chapter 2

Vectors and Equilibrium

Q.1 Define the terms (i) Unit vector, (ii) Position vector and (iii) Components of a vector.

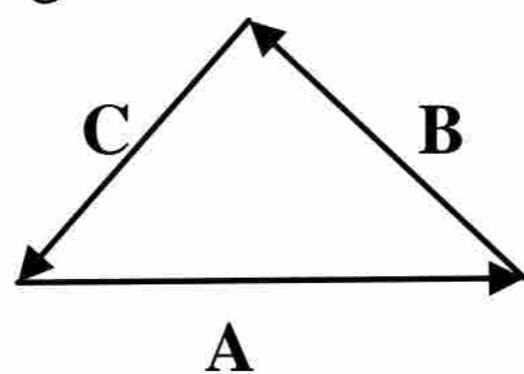
Ans. i) **Unit vector:** A vector whose magnitude is one and it is used to indicate the direction of any vector. $\hat{A} = \mathbf{A}/A$

ii) **Position vector:** A vector that describes the location of a point or particle with respect to the origin is called position vector and represented by \mathbf{r} .

iii) **Components of a vector:** A component of a vector is its effective value in a given direction.

Q.2 The vector sum of three vectors gives a zero resultant. What can be the orientation of the vectors?

Ans. If three vectors are drawn in such a way that they make a closed triangle then their vector sum will be zero. As shown in the figure.



$$\mathbf{A} + \mathbf{B} + \mathbf{C} = \mathbf{0}$$

Q.3 Vector \mathbf{A} lies in the xy plane. For what orientation will both of its rectangular components be negative? For what orientation will its components have opposite signs?

Ans. When vector \mathbf{A} lies in 3rd quadrant both of its rectangular components will be negative. When the vector will lie in 2nd or 4th quadrant both of its rectangular components will have opposite signs that is one is positive and other is negative.

Q.4 If one of the components of a vector is not zero, can its magnitude be zero? Explain.

Ans. No. Its magnitude cannot be zero.

$$\text{e.g. if } A_x \neq 0 \text{ \& } A_y = 0$$

$$\text{then } A = \sqrt{A_x^2 + (0)^2}$$

$$= \sqrt{A_x^2} = A_x$$

$$A \neq 0$$

Q.5 Can a vector have a component greater than the vector's magnitude?

Ans. No. A vector cannot have a component greater than the vector's magnitude because the component is an effective part of a vector in specific direction and part cannot be greater than the whole. A component may be equal to the vector when magnitude of one of the component is zero.

Q.6 Can the magnitude of a vector have a negative value?

Ans. No. The magnitude of a vector has always positive value;

$$A = \sqrt{A_x^2 + A_y^2}$$

Even when A_x and A_y are negative, the square of them will make them positive.

Q.7 If $\mathbf{A} + \mathbf{B} = \mathbf{0}$. What can you say about the components of the two vectors?

Ans. If $\mathbf{A} + \mathbf{B} = \mathbf{0}$, then there are two possibilities.

a. The corresponding components of both \mathbf{A} and \mathbf{B} are equal and opposite.

$$A_x \hat{i} + A_y \hat{j} + B_x \hat{i} + B_y \hat{j} = 0\hat{i} + 0\hat{j}$$

$$(A_x + B_x) \hat{i} + (A_y + B_y) \hat{j} = 0\hat{i} + 0\hat{j}$$

$$A_x + B_x = 0$$

$$A_y + B_y = 0$$

$$A_x = -B_x$$

$$A_y = -B_y$$

b. The vectors **A** and **B** are null vectors.

Q.8 *Under what circumstances would a vector have components that are equal in magnitude?*

Ans. We know that $A_x = A \cos \theta$ and $A_y = A \sin \theta$

Since the sine and cos have equal value for an angle of 45° . Therefore, when a vector makes an angle of 45° with X-axis, then its components will have equal magnitude.

OR

We know that $A_x = A \cos \theta$ and $A_y = A \sin \theta$

Suppose magnitudes of both the components are equal, then

$$A_y = A_x$$

$$A \sin \theta = A \cos \theta$$

$$A \sin \theta / A \cos \theta = 1$$

$$\tan \theta = 1$$

$$\theta = \tan^{-1}(1) = 45^\circ$$



Q.9 *Is it possible to add a vector quantity to a scalar quantity? Explain.*

Ans. No. It is not possible to add a vector quantity to a scalar quantity. Because scalar quantities are added by simple algebraic rule but vector quantities are added either by Head-to-Tail Rule or by their rectangular components methods. Hence scalar quantities will be added in scalar quantities and vector quantities will be added in vector quantities.

Q.10 *Can you add zero to a null vector?*

Ans. No. We cannot add zero to a null vector. Because zero is a scalar quantity and null vector is a vector quantity. Since scalar quantities are added by simple algebraic rule but vector quantities are added either by Head-to-Tail Rule or by their rectangular components methods. Hence scalar quantities will be added in scalar quantities and vector quantities will be added in vector quantities.

Q.11 *Two vectors have unequal magnitudes. Can their sum be zero? Explain.*

Ans. No. The sum of two unequal vectors cannot be zero. For the sum of vectors to be zero, the vectors must have equal magnitude with opposite directions.

Q.12 *Show that the sum and difference of two perpendicular vectors of equal lengths are also perpendicular and of the same length.*

Ans. In the figure,

Vectors **A** and **B** or **-B** are equal in length and are perpendicular to each other, therefore their resultants (**A + B**) and (**A - B**) makes an angle of 45° with X-axis,

Hence (**A + B**) \perp (**A - B**)

i.e. sum and difference of the vectors are perpendicular to each other.

From Figure:

$$|\vec{A} + \vec{B}| = \sqrt{A^2 + B^2}$$

$$|\vec{A} - \vec{B}| = \sqrt{A^2 + (-B)^2} = \sqrt{A^2 + B^2}$$

$$|\vec{A} + \vec{B}| = |\vec{A} - \vec{B}|$$

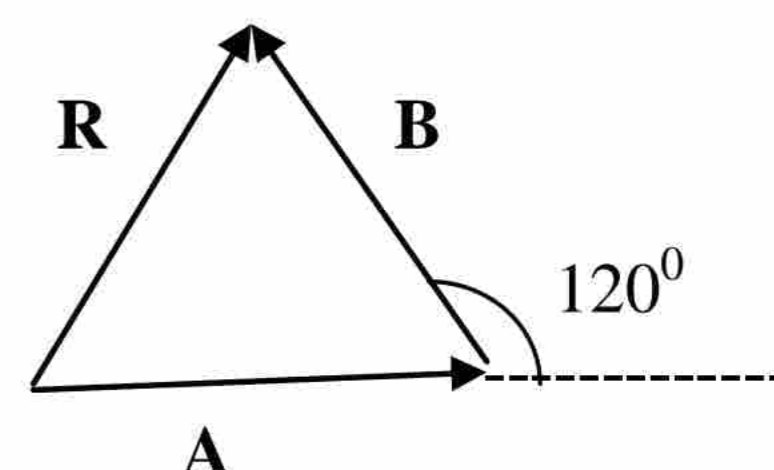
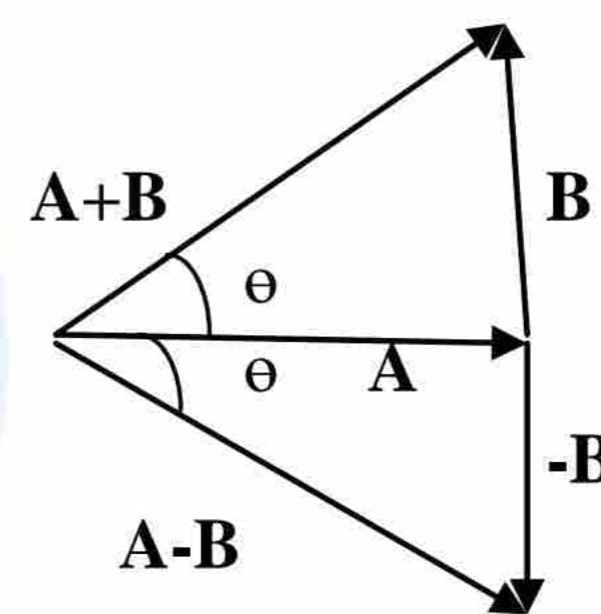
Hence sum and difference have same lengths.

Q.13 *How would the two vectors of the same magnitude have to be oriented, if they were to be combined to give a resultant equal to a vector of the same magnitude?*

Ans. When the angle between two vectors of same magnitude is 120° , the magnitude of the

resultant will be same to that of magnitude of each vector. Because

Vectors **A**, **B** and their Resultant **R** make an equilateral triangle whose each side is equal.



Q.14 The two vectors to be combined have magnitudes 60 N and 35 N. Pick the correct answer from those given and tell why is it the only one of the three that is correct.
i) 100 N ii) 70 N iii) 20 N

Ans. $A_1 = 60\text{N}$ and $A_2 = 35\text{N}$

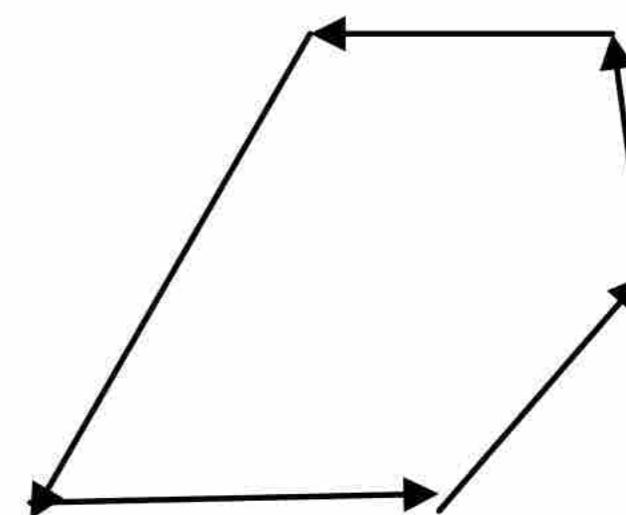
Answer (ii) 70 N is correct.

For maximum value, both vectors must be in same direction, $A_1 + A_2 = 60 + 35 = 95$ which is less than 100 therefore (i) 100 N cannot be the correct.

For minimum value, both vectors must be in opposite direction, $A_1 - A_2 = 60 - 35 = 25$ which is greater than 20, therefore (iii) 20 N cannot be the correct.

Q.15 Suppose the sides of a closed polygon represent vector arranged head to tail. What is the sum of these vectors?

Ans. The vector sum will be zero. Because the tail of first vector meets the head of last vector as shown in figure.

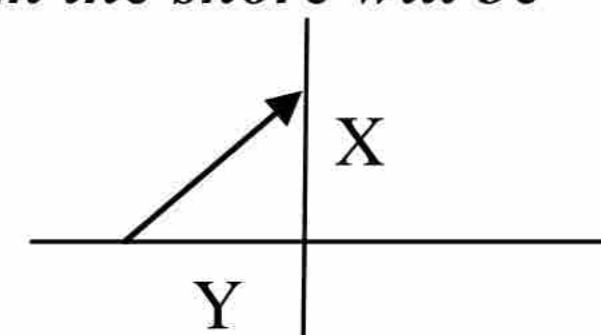


Hence $A+B+C+D+E = \mathbf{O}$

Q.16 Identify the correct answer;

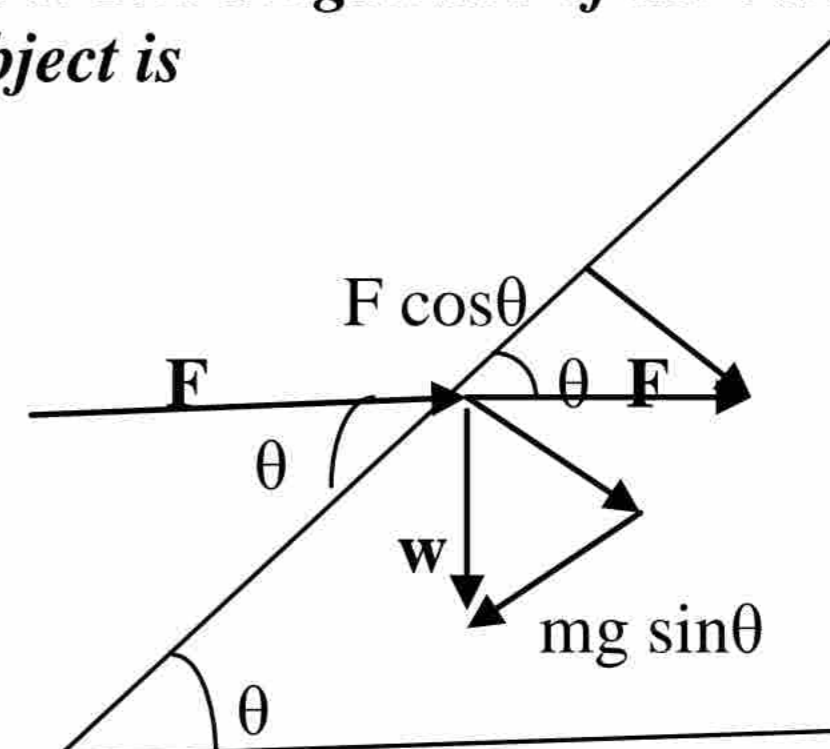
i) Two ships X and Y are travelling in different directions at equal speeds. The actual direction of motion of X is due north but to an observer on Y, the apparent direction of motion of X is north-east. The actual direction of motion of Y as observed from the shore will be
(A) East (B) West (C) South-East (D) South-West

Ans. i) The correct answer is (B) West.



ii) A horizontal force F is applied to a small object P of mass M at rest on a smooth plane inclined at an angle θ to the horizontal as shown in the figure. The magnitude of the resultant force acting up and along the surface of the plane, on the object is

- A) $F \cos \theta - mg \sin \theta$
B) $F \sin \theta - mg \cos \theta$
C) $F \cos \theta + mg \cos \theta$
D) $F \sin \theta + mg \sin \theta$
E) $mg \tan \theta$



Ans. (ii) The correct answer is (A) $F \cos \theta - mg \sin \theta$

Q.17 If all the components of the vectors, A_1 and A_2 were reversed, how would this alter $A_1 \times A_2$?

Ans. When all the components are reversed then vector is itself reversed i.e. $\mathbf{A}_1 = -\mathbf{A}_1$ & $\mathbf{A}_2 = -\mathbf{A}_2$

Therefore, $\mathbf{A}_1 \times \mathbf{A}_2 = -\mathbf{A}_1 \times -\mathbf{A}_2 = \mathbf{A}_1 \times \mathbf{A}_2$

Therefore, there will be no effect on the cross product of \mathbf{A}_1 and \mathbf{A}_2 , if all the components of the vectors \mathbf{A}_1 & \mathbf{A}_2 are reversed.

Q.18 Name the three different conditions that could make $A_1 \times A_2 = \mathbf{O}$.

Ans. $\mathbf{A}_1 \times \mathbf{A}_2 = \mathbf{O}$ if

i) \mathbf{A}_1 is null vector i.e. $\mathbf{O} \times \mathbf{A}_2 = \mathbf{O}$

ii) \mathbf{A}_2 is null vector i.e. $\mathbf{A}_1 \times \mathbf{O} = \mathbf{O}$

iii) \mathbf{A}_1 and \mathbf{A}_2 are parallel or anti-parallel, i.e. $\mathbf{A}_1 \times \mathbf{A}_2 = (A_1 A_2 \sin 0^\circ) \mathbf{n} = (A_1 A_2 \sin 180^\circ) \mathbf{n} = \mathbf{O}$

Q.19 Identify true or false statements and explain the reason.

a) A body in equilibrium implies that it is not moving nor rotating.

b) If coplanar forces acting on a body form a closed polygon, then the body is said to be in equilibrium.

Ans. a) It is false because a body in equilibrium may move and rotate with uniform velocity.

b) It is true. The vector sum will be zero for the coplanar forces forming a closed polygon because it fulfils the 1st condition of equilibrium.

Q.20 A picture is suspended from a wall by two strings. Show by diagram the configuration of the strings for which the tension in the strings will be minimum.

Ans. The configuration shown in the figure will have minimum tension.

For tension to be minimum, $\theta = 90^\circ$

$$\Sigma F_y = 0$$

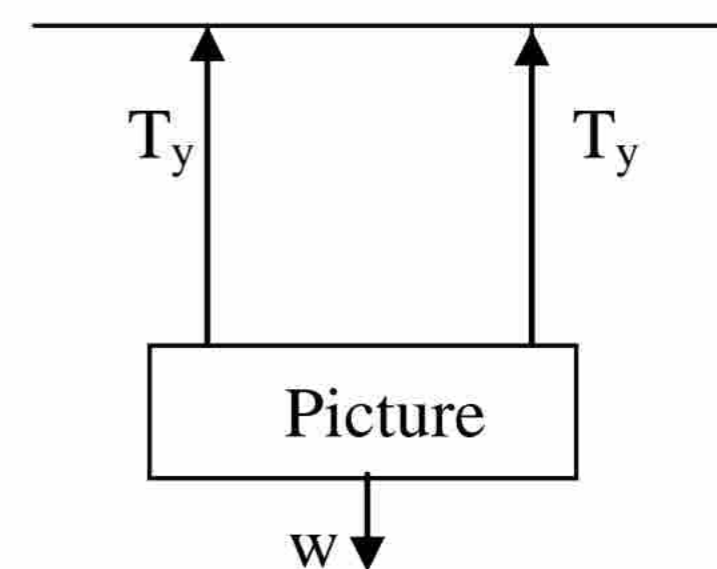
$$T_y + T_y - w = 0$$

$$2T_y - w = 0$$

$$2T \sin \theta = w$$

$$T = w / 2 \sin \theta$$

$$T = w / 2 \sin 90^\circ = w / 2$$



Q.21 Can a body rotate about its centre of gravity under the action of its weight?

Ans. No. A body cannot rotate about its centre of gravity under the action of its weight. Because weight acts at the centre of the body which is pivot in this case, so moment arm will become zero. Therefore, torque or turning effect will also be zero.

$$t = r \times F$$

$$= 0 \times F$$

$$t = 0$$



Chapter 3

Motion and Force

- Q.1** *What is the difference between uniform and variable velocity. From the explanation of variable velocity, define acceleration. Give SI units of velocity and acceleration.*
- Ans.** **Uniform velocity (or constant velocity):**
If a body covers equal distances in equal intervals of time in a particular direction, however small the intervals may be, the velocity of the body is called uniform velocity.
- Variable velocity:**
When a body covers unequal distances in equal intervals of time, or when its direction of motion changes, its velocity is called variable velocity.
- Acceleration:**
The time rate of change of velocity is called acceleration. The change in velocity can occur due to change in speed or in direction or in both.
- SI units of velocity and acceleration:**
Velocity: m / s (m s^{-1})
Acceleration: m / s^2 (m s^{-2})
- Q.2** *An object is thrown vertically upward. Discuss the sign of acceleration due to gravity, relative to velocity, while the object is in air.*
- Ans.** When an object is thrown vertically upward the direction of initial velocity is upward. Since acceleration due to gravity always acts vertically downward, hence 'g' will be negative relative to the velocity. For downward motion, velocity and acceleration due to gravity have same direction; therefore 'g' is positive with reference to the velocity.
- Q.3** *Can the velocity of an object reverse direction when acceleration is constant? If so, give an example.*
- Ans.** Yes, for freely falling bodies in air, velocity of an object reverses direction when acceleration is constant. If a body moves upward, at top of its motion it stops for a moment and then reverses its direction and moves downward. The acceleration due to gravity is constant for both upward and downward motion.
- Q.4** *Specify the correct statement:*
- a. An object can have a constant velocity even its speed is changing.
b. An object can have a constant speed even its velocity is changing.
c. An object can have a zero velocity even its acceleration is not zero.
d. An object subjected to a constant acceleration can reverse its velocity.
- Ans.** Statement (a) is incorrect because speed is the magnitude of velocity so when speed changes velocity also changes. Statement (b) is correct because magnitude of velocity may be constant but its direction may change. e.g. a body moving in circle with constant speed changes its direction at each instant. Statement (c) is correct because when an object is thrown vertically upward, at the top of its height, its velocity becomes zero but acceleration is not zero. Statement (d) is correct because when an object is thrown vertically upward, at the top of its height, its velocity reverses direction under constant acceleration due to gravity.
- Q.5** *A man standing on the top of a tower throws a ball straight up with initial velocity v_i and at the same time throws a second ball straight downward with the same speed. Which ball will have larger speed when it strikes the ground? Ignore air friction.*
- Ans.** Both the balls will strike the ground with same speed. When the ball thrown vertically upward will come down at the level from where it has been thrown, its speed will be equal to the speed of the ball thrown vertically downward. Afterwards both the balls cover equal distances, therefore, their speeds will be equal when they hit the ground.
- Q.6** *Explain the circumstances in which the velocity v and acceleration a of a car are*
(i) Parallel (ii) Anti-parallel (iii) Perpendicular to one another (iv) v is zero but a is not zero (v) a is zero but v is not zero
- Ans.** (i) The car moving with increasing speed, velocity and acceleration are in the same direction.
(ii) The car moving with decreasing speed, velocity and acceleration are in the opposite direction.
(iii) The car moving is in a curved or circular path, the velocity is along the tangent and acceleration is along the radius towards the centre of the circle. The tangent is perpendicular to radius. Therefore velocity and acceleration are perpendicular.
(iv) When sudden brakes are applied, then for a moment velocity is zero but change in velocity is not zero. Hence for a moment the car has acceleration but its velocity becomes zero.
(v) When a car is moving with uniform velocity, its acceleration will be zero.
- Q.7** *Motion with constant velocity is a special case of motion with constant acceleration. Is this statement true? Discuss.*
- Ans.** Yes this statement is true. The motion with constant velocity is a special case of motion with constant acceleration. When a body moves with uniformly increasing velocity then acceleration is constant. But when a body moves with constant velocity its acceleration is zero and zero is a special constant. Hence in both the cases acceleration is constant.
- Q.8** *Find the change in momentum for an object subjected to a given force for a given time and state law of motion in terms of momentum.*
- Ans.** **Statement of Newton's 2nd law of motion in terms of momentum**
"Time rate of change of momentum of a body is equal to the applied force on it".
Consider a body of mass 'm', a force 'F' acts on the body which changes its velocity from ' v_i ' to ' v_f ' in a time interval 't'. The acceleration of the body is given by

$$a = (v_f - v_i) / t$$

According to Newton's 2nd law

$$F = ma$$

$$F = m (v_f - v_i) / t$$

$$= (mv_f - mv_i) / t$$

$$= \Delta p / t$$

F = time rate of change of momentum

Q.9 *Define impulse and show that how it is related to linear momentum.*

Ans. **Impulse:** The product of large force acting on a body for short interval of time is called Impulse.

$$I = F \times \Delta t$$

Units of I = N s

Relationship between Impulse and Momentum

We know that

$$I = F \times \Delta t$$

From Newton's 2nd law in terms of momentum we have

$$F = \Delta p / \Delta t$$

Therefore, $I = (\Delta p / \Delta t) \times \Delta t$

$$I = \Delta p$$

It shows that impulse equals the change in linear momentum of a body.

Q.10 *State the law of conservation of linear momentum, pointing out the importance of isolated system. Explain, why under certain conditions, the law is useful even though the system is not completely isolated?*

Ans. i) **Law of conservation of linear momentum:**

The total linear momentum of an isolated system remains constant.

$$m_1 v_1 + m_2 v_2 = m_1 v_1' + m_2 v_2'$$

$$(m_1 v_1 + m_2 v_2) - (m_1 v_1' + m_2 v_2') = 0$$

i) A system on which no external force acts is called an isolated system. External influence may effect the mutual interaction. Hence law of conservation of linear momentum holds for isolated system.

ii) If a system is not completely isolated but external forces are very small comparing with mutual interacting forces, the law is useful. e.g. Pressure of a gas can be calculated by applying law of conservation of linear momentum we neglect 'g', which is the external force.

Q.11 *Explain the difference between elastic and inelastic collisions. Explain how would a bouncing ball behave in each case? Give plausible reasons for the fact that K.E. is not conserved in most cases?*

Ans. **Elastic collision:** The collision in which both momentum and kinetic energy are conserved is called elastic collision.

Inelastic collision: The collision in which momentum is conserved but kinetic energy does not conserve is called inelastic collision.

Bouncing ball: In elastic collision, the bouncing ball should rebound to the original height.

In inelastic collision, the bouncing ball will not rebound to the original height because some of K.E is lost.

Plausible reasons: In most collisions, some K.E change into heat, sound and in the deformation of the colliding objects which is the loss of K.E.

Q.12 *Explain what is meant by projectile motion. Derive expressions for a. the time of flight.*

b. the range of projectile. Show that the range of projectile is maximum when projectile is thrown at an angle of 45° with the horizontal.

Ans. It is long question. Pl. see the article in your text book.

Q.13 *At what point or points in its path does a projectile have its minimum speed, its maximum speed?*

Ans. A projectile has minimum speed at the highest point (maximum height) because vertical component of its speed becomes zero at this point and it has only horizontal component of the speed.

It has maximum speed at the launching and landing points because at both the points the projectile have both horizontal and vertical components of its speed.

Q.14 *Each of the following questions is followed by four answers, one of which is correct answer. Identify that answer.*

i. *What is meant by a ballistic trajectory?*

a. *The paths followed by an un-powered and unguided projectile.*

b. *The path followed by the powered and unguided projectile.*

c. *The path followed by un-powered and guided projectile.*

d. *The path followed by powered and guided projectile.*

ii. *What happens when a system of two bodies undergoes an elastic collision?*

a. *The momentum of the system changes.*

b. *The momentum of the system does not change.*

c. *The bodies come to rest after collision.*

d. *The energy conservation law is violated.*

Ans. (i) The correct answer is (a). A ballistic trajectory means the paths followed by an un-powered and un-guided projectile.

(ii) The correct answer is (b). In elastic collision, the momentum of the system does not change.

Chapter 4
Work and Energy
Short Answers

Q.1 *A person holds a bag of groceries while standing still, talking to a friend. A car is stationary with its engine running. From the standpoint of work, how are these two situations similar?*

Ans. In both cases work is zero, as there is no displacement;

$$W = F d \cos \theta = F \times 0 \times \cos \theta = 0$$

Q.2 *Calculate the work done in kilo joules in lifting a mass of 10 kg (at a steady velocity) through a vertical height of 10 m.*

Ans. $m = 10 \text{ kg}, \quad h = 10 \text{ m}, \quad \theta = 0^\circ$
 $W = F d \cos 0^\circ$
 $= F d$
 $= m g h$
 $= 10 \times 9.8 \times 10$
 $= 980 \text{ J} = 0.98 \text{ KJ}$

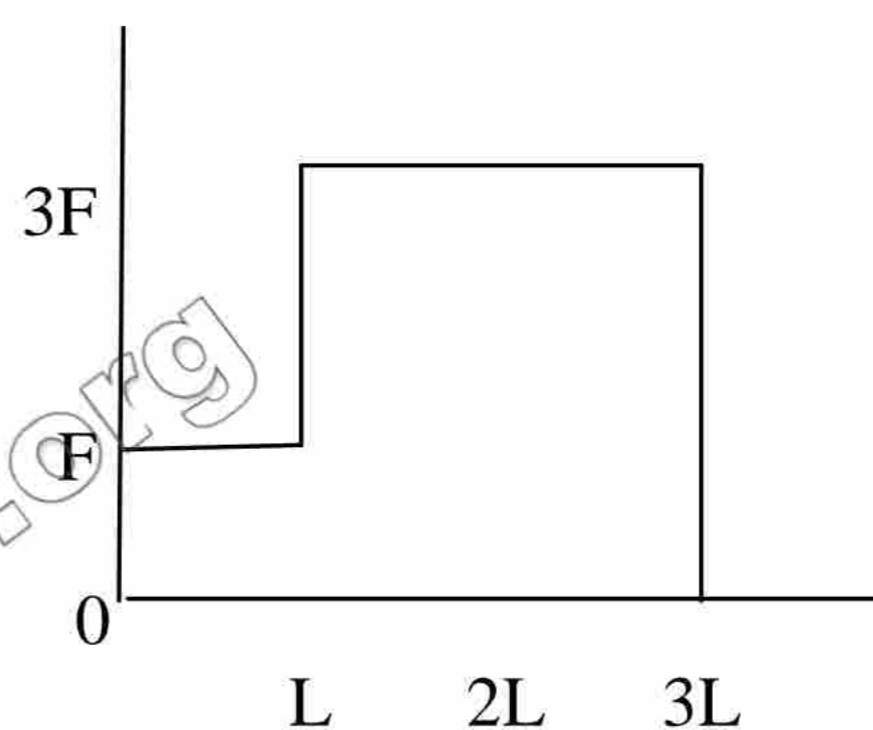
Q.3 *A force F acts through a distance L . the force is then increased to $3F$, and then acts through a further distance of $2L$. Draw the work diagram to scale.*

Ans. The following is the work diagram.

$$W = F \times L + 2L \times 3F$$

$$= FL + 6 FL$$

$$= 7 FL$$



Q.4 *In which case is more work done? When a 50 kg bag of books is lifted through 50 cm, or when a 50 kg crate is pushed through 2 m across the floor with a force of 50 N?*

Ans. In case of books:

$$W = F d \cos \theta$$

$$= m g h \cos 0^\circ$$

$$= m g h$$

$$= 50 \times 9.8 \times 0.5 = 245 \text{ J}$$

In case of crate:

$$W = F d \cos \theta$$

$$= F d \cos 0^\circ$$

$$= F d = 50 \times 2 = 100 \text{ J}$$

Therefore, more work is done in lifting bag of books.

Q.5 *An object has 1 J of potential energy. Explain what it means?*

Ans. $P.E_g = m g h = w h$

$$1 \text{ J} = (1 \text{ N}) \times (1 \text{ m})$$

1 J potential energy means a force of one newton is applied to a body to raise it through one meter height. It also means that it can do a work of one joule when it is released from height of one meter.

Q.6 *A ball of mass m is held at a height h_1 above a table. The tabletop is at a height h_2 above the floor. One student says that the ball has potential energy mgh_1 but another says that it is $mg(h_1 + h_2)$. Who is correct?*

Ans. Both the students are correct. One student is taking the reference from the top of the table and other is taking the reference from the floor.

PE with respect to table = mgh_1

PE with reference to floor = $mg(h_1 + h_2)$

Q.7 *When a rocket re-enters the atmosphere, its nose cone becomes very hot. Where does this heat energy come from?*

Ans. Work is done by the rocket against the air friction and the friction of the dust particles in the air. This work done against the friction produces the heat which makes the nose cone of the rocket very hot.

Q.8 *What sort of energy is in the following:*

- a) *Compressed spring*
- b) *Water in a high dam*
- c) *A moving car*

Ans. a) Elastic PE in compressed spring.
b) Gravitational PE in water in a high dam.
c) Kinetic energy in a moving car.

Q.9 *A girl drops a cup from a certain height, which breaks into pieces. What energy changes are involved?*

Ans. Potential energy is converted into kinetic energy and kinetic energy is converted into sound energy, heat energy, work done in breaking the cup and kinetic energy of the pieces.

PE → gain in KE → (sound energy + heat energy + work done in breaking the cup + KE of the pieces)

Q.10 *A body uses a catapult to throw a stone, which accidentally smashes a green house window. List the possible energy changes.*

Ans. Elastic potential energy is converted into kinetic energy and kinetic energy is converted into sound energy, heat energy, work done in breaking the window and kinetic energy of the pieces.

Elastic PE → gain in KE → (sound energy + heat energy + Work done in breaking + kinetic energy of the pieces)



Chapter 5

Circular Motion

Short Answers

Q.1 Explain the difference between tangential velocity and the angular velocity. If one of these is given for a wheel of known radius, how will you find the other?

Ans. Tangential velocity (v)

“The linear velocity of body along the tangent at any point on the circle is called tangential velocity”.

Angular velocity (ω): The rate of change of angular displacement of a particle moving along a curved path is called angular velocity.

If one quantity is given with known radius, the other can be found from $v = r \omega$

Q.2 Explain what is meant by centripetal force and why it must be furnished to an object if the object is to follow a circular path?

Ans. Centripetal force (F_c): The force needed to bend the normal straight path of a particle into a circular path is called centripetal force. Mathematically,

$$F_c = mv^2 / r = m r \omega^2$$

If we want to move the body in a circular path of constant radius its direction is to be changed at every point. For this purpose, we need to furnish centripetal force other wise body will move in straight path.

Q.3 What is meant by moment of inertia? Explain its significance.

Ans. Moment of inertial (I): The product of mass of the object and square of its distance from the axis of rotation is called moment of inertia. It is represented by I .

Mathematically,

$$I = m r^2, \text{ where } m \text{ is the mass of an object and } r \text{ is the distance from the axis of rotation.}$$

Significance: It plays the same role in angular motion as mass plays its role in linear motion. As mass is a scalar quantity, moment of inertia is also a scalar quantity. Inertia depends upon mass but moment of inertia depends upon both mass and square of distance from the axis of rotation.

Q.4 What is meant by angular momentum? Explain the law of conservation of angular momentum?

Ans. Angular momentum: The cross product of position vector and linear momentum is called angular momentum.

Mathematically,

$$\mathbf{L} = \mathbf{r} \times \mathbf{p}. \quad \text{Also } \mathbf{L} = I \boldsymbol{\omega}$$

Law of conservation of angular momentum:

If no external torque acts on a system, the total angular momentum of the system remains constant. Mathematically,

$$L_{\text{total}} = L_1 + L_2 + \dots = \text{constant}$$

$$\text{or } L = I_1 \omega_1 = I_2 \omega_2 = \text{constant}$$

If moment of inertia increases, ω decreases and vice versa.

Q.5 Show that orbital angular momentum $L_o = m v r$

Ans. Consider an object of mass m moving in a circular path of radius r with velocity v . Its angular momentum can be given as

$$\mathbf{L}_o = \mathbf{r} \times \mathbf{p}$$

$$L_o = r p \sin \theta$$

$$\text{If } \theta = 90^\circ \text{ then}$$

$$L_o = r p$$

$$\text{But } p = m v$$

$$L_o = m v r$$



Q.6 Describe what should be the minimum velocity, for a satellite, to orbit close to the Earth around it.

Ans. Consider a satellite moving in an orbit close to the earth. Its centripetal acceleration is given by $a_c = v^2/R$. In a circular orbit close to the earth, the centripetal acceleration is provided by gravity.

$$\text{Hence } g = v^2/R \text{ or } v = \sqrt{g R}$$

$$\text{Here } 9.8 \text{ m/s}^2 \text{ and } R = 6.4 \times 10^6 \text{ m}$$

$$v = \sqrt{9.8 \times 6.4 \times 10^6} = 7.9 \text{ km/s}$$

Q.7 *State the direction of the following vectors in simple situations; angular momentum and angular velocity.*

Ans. In a situation where a particle is moving in a circular path in anticlockwise direction, the direction of angular momentum and angular velocity, according to right hand rule, is up along the axis of rotation.

Q.8 *Explain why an object, orbiting the Earth, is said to be freely falling. Use your explanation to point out why objects appear weightless under certain circumstances.*

Ans. An object is given certain tangential velocity for orbiting the earth. It will follow a curved path due force of gravity and act as a freely falling body. When the curvature of its path matches the curvature of the earth then it will start orbiting the earth. Its centripetal acceleration equals its acceleration due to gravity;
i.e. $a = g$, so $T = mg - mg = 0$.
Hence it appears weightless.

Q.9 *When mud flies off the tyre of a moving bicycle, in what direction does it fly? Explain.*

Ans. The mud sticks with the tyre due adhesive force between mud and tyre. When bicycle moves this force provide the centripetal force to the mud. When speed of the bicycle is increased then this force become insufficient to keep the mud with tyre and it will fly off in a direction tangent to the wheel. When mud separates from the tyre, centripetal force on the mud particles become zero.

Q.10 *A disc and hoop start moving down from the top of an inclined plane at the same time. Which one will be moving faster on reaching the bottom?*

Ans. When disc and hoop roll down from the top of an inclined plane at the same time then

$$P.E. = K.E_{\text{tran}} + K.E_{\text{rot}}$$

For Disc

$$mgh = \frac{1}{2} mv^2 + \frac{1}{4} mv^2$$

$$v_d = (4/3 gh)^{1/2} \text{ -----(1)}$$

For Hoop

$$mgh = \frac{1}{2} mv^2 + \frac{1}{2} mv^2$$

$$v_h = (gh)^{1/2} \text{ -----(2)}$$

From equation (1) and (2) it is clear that $4/3 > 1$, hence speed of the disc is greater than speed of hoop on reaching the ground.

Q.11 *Why does a diver change his body positions before diving in the pool?*

Ans. The diver changes his body position in order to conserve his total angular momentum according to following relation.

$$I_1 \omega_1 = I_2 \omega_2$$

For stretched position of the diver moment of inertia I_1 is greater and ω_1 will be smaller. When the diver tucks his body then his moment of inertia I_2 decreases and ω_2 will increase. Due to this product of I and ω in both the situation remains constant.

Q.12 *A student holds two dumb-bells without stretched arms while sitting on a turntable. He is given a push until he is rotating at certain angular velocity. The student then pulls the dumbbell towards his chest. What will be the effect on rate of rotation?*

Ans. The relation for angular momentum is given by

$$L = I \omega = mr^2 \omega$$

In order to conserve the total angular momentum, the rate of rotation will increase when the student pulls the dumbbell towards his chest because moment of inertia will decrease due to smaller r .

Q.13 *Explain how much minimum number of geo-stationary satellites are required for global coverage of T.V. transmission.*

Ans. Three correctly positioned satellites are sufficient for global coverage of TV transmission. As one such satellite covers 120° of longitude i.e. $120^\circ \times 3 = 360^\circ$

Chapter 6
Fluid Dynamics
Short Answers

Q.1 *Explain what do you understand by the term viscosity?*

Ans. Viscosity:

The property of fluids by which they resist their flow due to the internal friction between the layers is called viscosity. Greater is the internal friction between the layers of fluids greater will be the viscosity of the fluids. e.g. water has less viscosity as compared to honey.

Q.2 *What is meant by drag force? What are the factors upon which drag force acting upon a small sphere of radius r , moving down through liquid, depend?*

Ans. Drag force:

The retarding force experienced by an object when it moves through a fluid is called drag force.

Factors:

According to Stoke's Law, the drag force, F is;

$$F = 6\pi\eta r v$$

Drag force is directly proportional to the following factors:

η = coefficient of viscosity, r = radius of the sphere

v = speed of the sphere through the fluid.

Q.3 *Why fog droplets appear to be suspended in air?*

Ans. As the mass of fog droplet is very small so its weight is very small. Therefore, when fog droplet falls down, soon its weight becomes equal to the drag force and net force becomes zero. So it falls with very small terminal velocity due which it appears to be suspended in air.

Q.4 *Explain the difference between laminar flow and turbulent flow.*

Ans. Laminar flow:

In laminar flow, every particle that passes a particular point moves along exactly same path, as followed by particles which passed those points earlier. The paths followed by the particles are called streams. In laminar flow streams do not cross each other. Generally, at lower speeds of the fluids flow is laminar.

Turbulent flow:

The unsteady or irregular flow is called turbulent flow. In turbulent flow streams will intersect each other. Generally, at higher speeds the flow become turbulent.

Q.5 *State Bernoulli's relation to a liquid in motion and describe some of its applications.*

Ans. Bernoulli's equation:

The sum of pressure, K.E per unit volume and P.E. per unit volume of an ideal fluid flowing through a closed pipe of different cross-sectional area remains same. It is based upon the law of conservation of energy.

Mathematically,

$$p + \frac{1}{2} \rho v^2 + \rho gh = \text{constant}$$

where p and ρ are the pressure and density of the fluid, v is the velocity of the fluid.

Applications:

a) Torricelli's Theorem

b) Venturi Relation

c) Relating speed & pressure e.g. i) spinning of tennis ball, ii) swing of cricket ball iii) designing of aeroplane wing.

Q.6 *A person is standing near a fast moving train. Is there any danger that he will fall towards it?*

Ans. Yes, there is danger that he will fall towards the fast moving train. As the speed of air between person and fast moving train is high, the pressure will be low. Whereas the speed of the air on the other side of the person is low and pressure will be high. So due to this pressure difference he might fall towards the train.

Q.7 *Identify the correct answer. What do you infer from Bernoulli's theorem?*

(i) *Where the speed of the fluid is high the pressure will be low.*

(ii) *Where the speed of the fluid is high the pressure is also high.*

(iii) *This theorem is valid only for turbulent flow of the fluid.*

Ans. The correct answer is (i), where the speed of the fluid is high the pressure will be low.

Inference:

Bernoulli's theorem is just another form of law of conservation of energy for fluid flow.

Q.8 *Two row boats moving parallel in the same direction are pulled towards each other. Explain.*

Ans. The speed of water and air between the row boats is high as compared to speed of water and air on other sides of the row boats. Therefore, the pressure between the row boats will be low and pressure on other sides of the boats will be high. So due to this pressure difference both the row boats are pulled towards each other.

Q.9 *Explain, how the swing is produced in a fast moving cricket ball?*

Ans. The velocity of the air on one side of the ball increases due to spin and air speed decreases on the other side of the ball. A pressure difference is produced on both sides of the ball. Due to this pressure difference an extra curvature is given to the ball which is known as swing. This gives swing to the cricket ball.

Q.10 *Explain the working of a carburetor of a motor car using Bernoulli's principle.*

Ans. Working of a Carburetor:

The carburetor of a car engine uses a Venturi duct to feed the correct mix of air and petrol to the cylinders. Air is drawn through the duct and along a pipe to the cylinders. A tiny inlet at the side of duct is fed with petrol. The air through the duct moves very fast, creating low pressure in the duct, which draws petrol vapours into the air stream.

Q.11 *For which position will the maximum blood pressure in the body have the smallest value. (a) Standing up right (b) Sitting (c) Lying horizontally (d) Standing on one's head?*

Ans. (c) lying horizontally position will have smallest value of maximum blood pressure in the body. In this position all parts of the body are nearly in level with the heart, and heart will not have to do extra work against gravity.

Q.12 *In an orbiting space station, would the blood pressure in major arteries in the leg ever be greater than the blood pressure in major arteries in the neck?*

Ans. No, the space station is in state of weightlessness. Therefore, there will be no work done against gravity. Hence, the blood pressure in major arteries in the leg will be equal to that of in arteries in the neck.

Chapter 7

Simple Harmonic Motion

Short Answers

Q.1 Name two characteristics of simple harmonic motion.

Ans. In a vibratory motion

- i) Acceleration is directly proportional to the displacement from the mean position.
- ii) Acceleration is directed towards its mean position.

$$\text{i.e. } a \propto -x$$

Q.2 Does frequency depends on amplitude for harmonic oscillators?

Ans. No. Frequency of harmonic oscillator is given by the following formula

$$f = \frac{1}{2\pi} \sqrt{g/l}$$

The above formula clearly shows that frequency of harmonic oscillator is independent of amplitude. It depends upon time g and length of the harmonic oscillator.

Q.3 Can we realize an ideal simple pendulum?

Ans. No we cannot realize an ideal simple pendulum. Because for an ideal simple pendulum following conditions must be met:

- i. The string must be massless and inextensible.
- ii. The bob should be a point mass
- iii. The support must be frictionless.
- iv. The length of string should not change with temperature
- v. Acceleration due to gravity should not change due to change of height
- vi. There should not be air friction

Clearly all these requirements cannot be met perfectly and hence we cannot make an ideal simple pendulum.

Q.4 What is the total distance travelled by an object moving with SHM in a time equal to its period, if its amplitude is A ?

Ans. Since the time is equal to the time period (time for one complete vibration) of the SHO. One vibration has four equal amplitudes. Therefore, the total distance travelled in one vibration is equal to $4A$. i.e. $S = A+A+A+A = 4A$

Q.5 What happens to the period of a simple pendulum if its length is doubled? What happens if the suspended mass is doubled?

Ans. The time period of simple pendulum is given by the formula

$$T = 2\pi\sqrt{l/g}$$

When, length = $2l$

$$T' = 2\pi\sqrt{2l/g} = \sqrt{2} \times 2\pi\sqrt{l/g} = \sqrt{2} T$$

So the time period increases by $\sqrt{2}$ ($=1.414$) times, as length is doubled.

ii) Since time period is independent of mass, therefore, there will be no change in the time period when suspended mass is doubled.

Q.6 Does the acceleration of a simple harmonic oscillator remain constant during its motion? Is the acceleration ever zero? Explain.

Ans. No. Acceleration depends upon displacement, x

$$a = -\omega^2 x$$

The acceleration is zero at mean position ($x = 0$) and it becomes maximum at extreme position ($x = x_0$) so the acceleration of simple harmonic oscillator does not remain constant during its motion.

Q.7 What is meant by phase angle? Does it define angle between maximum displacement and the driving force?

Ans. Phase angle (or phase):

The angle $\theta = \omega t$ which specifies the displacement as well as the direction of motion of the point/object executing SHM". It indicates the state and direction of motion of a vibrating particle.

No, it does not define angle between maximum displacement and the driving force.

Q.8 Under what conditions does the addition of two simple harmonic motions produce a resultant, which is also simple harmonic?

Ans. The conditions are as under:

- i. The two SHMs must have same nature.
- ii. The two SHMs must be parallel.
- iii. The two SHMs must have same phase difference.

Q.9 Show that in SHM the acceleration is zero when the velocity is greatest and the velocity is zero when the acceleration is greatest.

Ans. We have for SHM

$$v = \omega \sqrt{x_0^2 - x^2} \quad \& \quad a = -\omega^2 x$$

At mean position

$x = 0$ then $a = 0$ & $v = \omega x_0$ — maximum value,
i.e. acceleration is zero and velocity is greatest.

At extreme positions

$x = x_0$ then $v = 0$ & $a = -\omega x_0$ — maximum value.
i. e. velocity is zero when acceleration is greatest.

Q.10 In relation to SHM, explain the equations;

(i) $y = A \sin (\omega t + \varphi)$

(ii) $a = -\omega^2 x$



Ans. i) $y = A \sin (\omega t + \varphi)$

y = Instantaneous displacement, A = Amplitude, ωt = angle subtended in time t , φ = initial phase

This equation shows that displacement of SHM as a function of amplitude and phase angle depending upon time.

ii) $a = -\omega^2 x$

where a = acceleration of a particle executing SHM, ω = constant angular frequency, x = instantaneous displacement from the mean position.

This equation shows that acceleration is directly proportional to displacement and is directed towards mean position.

Q.11 Explain the relation between total energy, potential energy and kinetic energy for a body oscillating with SHM.

Ans. For a body executing SHM;

At mean position, $x = 0$

$$\text{P.E} = \frac{1}{2} k x^2 = \frac{1}{2} k (0)^2 = 0 \rightarrow \text{minimum}$$

$$\text{K.E} = \frac{1}{2} k x_0^2 (1 - x^2/x_0^2) = \frac{1}{2} k x_0^2 \rightarrow \text{maximum}$$

At extreme position, $x = x_0$

$$\text{P.E} = \frac{1}{2} k x^2 = \frac{1}{2} k x_0^2 \rightarrow \text{maximum}$$

$$\text{K.E} = \frac{1}{2} k x_0^2 (1 - x^2/x_0^2) = 0 \rightarrow \text{minimum}$$

At intermediate position, $x = x$

$$\text{Total Energy} = \text{P.E} + \text{K.E} = \frac{1}{2} k x^2 + \frac{1}{2} k x_0^2 (1 - x^2/x_0^2) = \frac{1}{2} k x_0^2$$

We conclude that energy oscillates between maximum and minimum values and remain constant throughout equal to $\frac{1}{2} k x_0^2$.

Q.12 Describe some common phenomena in which resonance plays an important role.

Ans. Important role of resonance:

- **Children's swing:** It is a good example of mechanical resonance. If series of regular pushes are given to the swing, resonance will take place and amplitude of swing will increase enormously.
- **Bridge structure:** The column of soldiers, while marching on a bridge of long span are advised to break their steps. Their rhythmic march might produce resonance in the structure of bridge and it may collapse.
- **Tuning radio/TV:** It is the best example of electrical resonance. To tune a radio station, we turn the knob of a radio to change the natural frequency of the electric circuit of the receiver so that it becomes equal to the transmission frequency of a particular station. When two frequencies become equal resonance takes place and that station is selected on the radio/TV.
- **Microwave oven:** The microwave oven is used to heat and cook food very efficiently and evenly. The waves produced by microwave oven have a wavelength of 12 cm and at a frequency of 2450 MHz. These waves are absorbed due to resonance by water and fat molecules in the food which heats and cooks the food.

Q.13 If a mass spring system is hung vertically and set into oscillations, why does the motion eventually stop?

Ans. Due to air resistance, damping force acts on mass-spring oscillating system. The energy of mass spring system is dissipated into heat due to these frictional forces and eventually it stops.

Chapter 8

Wave Motion

Short Answers

Q.1 *What features do longitudinal waves have in common with transverse waves?*

Ans. Common features of longitudinal and transverse waves:

- 1) In both waves, particles of the medium vibrate about their mean position.
- 2) Both transport energy and momentum but not matter.
- 3) When propagate in a medium they obey, $v = f \lambda$
- 4) Both are mechanical waves.

Q.2 *The five possible waveforms obtained when the output from a microphone is fed into the Y-input of cathode ray oscilloscope, with the time base on, are shown in the fig. These waveforms are obtained under the same adjustment of the cathode ray oscilloscope controls. Indicate the waveform*

- a) *which trace represents the loudest note?*
- b) *which trace represents the highest frequency?*

Ans. a) trace D represents the loudest note because the amplitude is maximum.

b) trace B represents the highest frequency because it has more number of waves.

Q.3 *Is it possible for two identical waves travelling in the same direction along a string to give rise to a stationary wave?*

Ans. No, it is not possible. In this case interference will take place. For stationary waves two identical waves should travel in opposite direction along a string.

Q.4 *A wave is produced along a stretched string but some of its particles permanently show zero displacement. What type of wave is it?*

Ans. This is a stationary wave. In stationary waves some of its particles permanently show zero displacement, are called nodes whereas some of its particles show maximum displacements are called antinodes.

Q.5 *Explain the terms crest, trough, node and antinode.*

Ans. Crest:

The portion of a transverse wave above the mean level is called crest.

Trough:

The portion of a transverse wave below the mean level is called trough.

Node:

The particles in stationary waves which have zero displacement are called nodes.

Antinode:

The particles in stationary waves which have maximum displacement from the mean position are called antinodes.

Q.6 *Why does sound travel faster in solids than in gases?*

Ans. In the relation $v = \sqrt{E / \rho}$

ρ of solids is greater than density of gasses but E of solids is far greater than E of gasses. Therefore, speed of sound is greater in solids than in gasses.

Also solid molecules are very close to each other as compared to gas molecules. Therefore, sound waves are quickly pass through the solids as compared to gasses.

Q.7 *How are beats useful in tuning musical instruments?*

Ans. Tuning the musical instruments means to match their frequencies. The musical instruments which are to be tuned are sounded together with standard musical instrument. If the beats are produced, then frequency of the musical instruments is changed by either changing the length or tension in the strings until the beats are not produced.

Q.8 *When two notes of frequencies f_1 and f_2 are sounded together, beats are formed. If $f_1 > f_2$, what will be the frequency of beats?*

- i) $f_1 + f_2$ ii) $\frac{1}{2} (f_1 + f_2)$ iii) $f_1 - f_2$ iv) $\frac{1}{2} (f_1 - f_2)$

Ans. Correct answer is (iii) ($f_1 - f_2$)

Number of beats per second is equal to the difference between the frequencies of the two tuning forks.

Q.9 *As a result of distant explosion, an observer senses a ground tremor and then hears the explosion. Explain the time difference.*

Ans. The sound waves produced by the explosion reach the observer through ground and air. As sound waves travel faster in solids than in gases, therefore, sound waves travelling through ground reach the observer earlier than the sound waves which reach the observer through air. Hence the observer first feels ground tremor and then hears the sound.

Q.10 *Explain why sound travels faster in warm air than in cold air.*

Ans. As $v \propto \sqrt{T}$

The above relation shows that speed of sound is directly proportion to the square root of Kelvin temperature. Since temperature of warm air is greater than cold air that's why sound travels faster in warm air than in cold air.

Q.11 *How should a sound source move with respect to an observer so that the frequency of its sound does not change?*

Ans. From Doppler effect, there is an apparent change in the frequency due to relative motion of source and observer which changes the distance between them. When source moves in a circle around a stationary observer then distance between source and observer does not change, although source is moving with respect to observer. Hence there will be no apparent change in frequency.



Chapter 9
Physical Optics
Short Answers

Q.1 *Under what conditions two or more sources of light behave as coherent sources?*

Ans. Two or more sources of light behave as coherent sources under following conditions:

- a. They must have same phase.
- b. They must have same wavelength and frequency.

Q.2 *How is the distance between interference fringes affected by the separation between the slits of Young's experiment? Can fringes disappear?*

Ans. We know that

$$\text{Fringe spacing} = \Delta y = \lambda L / d$$

The relation shows that fringe spacing is inversely proportional to the separation 'd' between the slits. If separation is increased the distance between fringes will decrease. Ultimately fringes disappear for larger distance between the slits.

Q.3 *Can visible light produce interference fringes? Explain.*

Ans. Yes, visible light can produce interference fringes, if it has phase coherence. Since white light has different colours hence coloured interference fringes will be produced with it.

Q.4 *In the Young's experiment, one of the slits is covered with blue filter and other with red filter. What would be the pattern of light intensity on the screen?*

Ans. For interference two waves must have phase coherence, same wavelength and same frequency. Since blue and red colours don't have this property so there will be no interference pattern seen on the screen. We will see only one blue dot and one red dot on the screen.

Q.5 *Explain whether the Young's experiment is an experiment for studying interference or diffraction effects of light.*

Ans. Basically Young's experiment is an experiment for studying interference. But diffraction of light also takes place at the slits in this experiment. After diffraction, interference takes place and we get the interference pattern on the screen.

Q.6 *An oil film spreading over a wet footpath shows colours. Explain how does it happen?*

Ans. It is due to interference phenomena of light waves. It takes place due the interference of portion of wave reflected from the upper surface of the oil film and a portion of wave reflected from the bottom of oil film. Both parts of light are monochromatic and coherent and they interfere each other.

Q.7 *Could you obtain Newton's rings with transmitted light? If yes, would the pattern be different from that obtained with reflected light?*

Ans. Yes. We can obtain Newton's rings with transmitted light. The difference will be that the central spot will be bright in this case because the path difference between rays is zero in this case. Whereas central spot in reflected light is dark due to a path difference of $\lambda/2$.

Q.8 *In the white light spectrum obtained with a diffraction grating, the third order image of a wavelength coincides with the fourth order image of a second wavelength. Calculate the ratio of the two wavelengths.*

Ans. We know that

$$d \sin\theta = n\lambda$$

$$\text{for } n=3$$

$$d \sin\theta = 3\lambda_1 \text{ -----(1)}$$

$$\text{and for } n=4$$

$$d \sin\theta = 4\lambda_2 \text{ -----(2)}$$

Comparing equation (1) and (2) we get

$$3\lambda_1 = 4\lambda_2$$

$$\text{or } \lambda_1 / \lambda_2 = 4/3$$

Q.9 *How would you manage to get more orders of spectra using a diffraction grating?*

Ans. We have, $d \sin\theta = n\lambda$ therefore $n = d \sin\theta / \lambda$

To increase orders of spectra (n):

- a) We shall increase the grating element (d) i.e. a grating with lesser number of ruled lines will be used.

b) We shall use light of short wavelength.

c) We shall take $\theta=90^\circ$

Q.10 *Why the Polaroid sunglasses are better than ordinary sunglasses?*

Ans. Polaroid sunglasses reduces glare due polarization of light. Therefore, intensity of light on the eye will be reduced. Hence our eyes are saved from unnecessary strain.

Q.11 *How would you distinguish between un-polarized and plan-polarized lights?*

Ans. A Polarizer will distinguish between un-polarized and plane-polarized light. A polarizer will be rotated in front of light if we get some light on the other side of the polarizer at all angles then light is un-polarized. If we don't get light on the other side of polarizer at some angle, then light is polarized.

Q.12 *Fill the blanks.*

i) According to _____ principle, each point on a wave front acts as a source of secondary _____.

ii) In Young's experiment, the distance between two adjacent bright fringes for violet light is _____ than that for green light.

iii) The distance between bright fringes in the interference pattern _____ as the wavelength of light used increases.

iv) A diffraction grating is used to make a diffraction pattern for yellow light and then for red light. The distances between the red spots will be _____ than that for yellow light.

v) The phenomenon of polarization of light reveals that light waves are _____ waves.

vi) A polaroid is a commercial _____.

vii) A Polaroid glass _____ glare of light produced at a road surface.

Ans. i) Huygen's, wavelets

ii) smaller

iii) increases

iv) larger

v) transverse

vi) polarizing material

vii) reduce.



Chapter 10

Geometrical Optics

Short Answers

Q.1 *What do you understand by linear magnification and angular magnification? Explain how a convex lens is used as a magnifier?*

Ans. **Linear (or Transverse) magnification:**

The ratio of the size of the image to size of the object is called linear magnification.

$$M = I / O = q / p$$

Angular magnification (Magnifying power):

The ratio of the angles subtended by the image as seen through the optical device to the angle subtended by the object at the unaided eye is called angular magnification.

$$M = \beta / \alpha$$

Convex Lens as a Magnifier:

An ordinary convex lens held close to the eye is served as magnifying glass or simple microscope. The image formed is erect, virtual and magnified because in this case the object is placed inside the focus point.

Q.2 *Explain the difference between angular magnification and resolving power of an optical instrument. What limits the magnification of an optical instrument?*

Ans. **Angular magnification (or Magnifying power):**

The ratio of the angles subtended by the image as seen through the optical device to the angle subtended by the object at the unaided eye is called angular magnification.

$$M = \beta / \alpha$$

Resolving power:

The ability of an instrument to reveal the minor details of the object under examination is called resolving power.

$$\alpha_{\min} = 1.22 \lambda / D \text{ and resolving power is given by } R = 1 / \alpha_{\min}$$

where λ = wavelength of light & D = lens diameter

Limits: Magnification of an optical instrument is limited by focal length of lens and by chromatic and spherical aberrations of lenses. Also wavelength of light limits magnification.

Q.3 *Why would it be advantageous to use blue light with a compound microscope?*

Ans. The formula for resolving power is given by, $R = D / 1.22 \lambda$

As blue light produce less diffraction due to short wavelength (λ) hence it increases the resolving power and more details of an object can be seen.

Q.4 *One can buy a cheap microscope for use by the children. The image seen in such a microscope have coloured edges. Why is this so?*

Ans. When light passes through a glass lens it splits into its constituent colours. This is called dispersion of light. A cheap microscope cannot focus light of different colours at a single point due defect of its lenses. This defect of lens is called chromatic aberration. Due this aberration the image seen through a cheap microscope has coloured edges.

Q.5 *Describe with the help of diagrams, how (a) a single biconvex lens can be used as a magnifying glass. (b) biconvex lenses can be arranged to form a microscope.*

Ans. This is a long question. Pl. see the topics in text book.

Q.6 *If a person were looking through a telescope at the full moon, how would the appearance of the moon be changed by covering half of the objective lens.*

Ans. The intensity of the image becomes half and due this the brightness of the moon will become half. The reason is that when half of the objective is covered then transmission of light will become half. There will be no change of shape and he will see full image of the moon

Q.7 *A magnifying glass gives a five times enlarged image at a distance of 25 cm from the lens. Find, by ray diagram, the focal length of the lens.*

Ans. We know that the formula for the magnification is

$$M = 1 + d/f$$

$$\text{or } f = d / M - 1 = 25/5 - 1 = 6.2 \text{ cm}$$

Q.8 *Identify the correct answer.*

i) *The resolving power of a compound microscope depends on;*

- a) *The refractive index of the medium in which the object is placed.*
- b) *The diameter of the objective lens.*
- c) *The angle subtended by the objective lens at the object.*
- d) *The position of an observer's eye with regard to the eye lens.*

ii) *The resolving power of an astronomical telescope depends on:*

- a) *The focal length of the objective lens.*
- b) *The least distance of distinct vision of the observer.*
- c) *The focal length of the eye lens.*
- d) *The diameter of the objective lens.*

Ans. i) Correct answer is (b) The diameter of the objective lens.

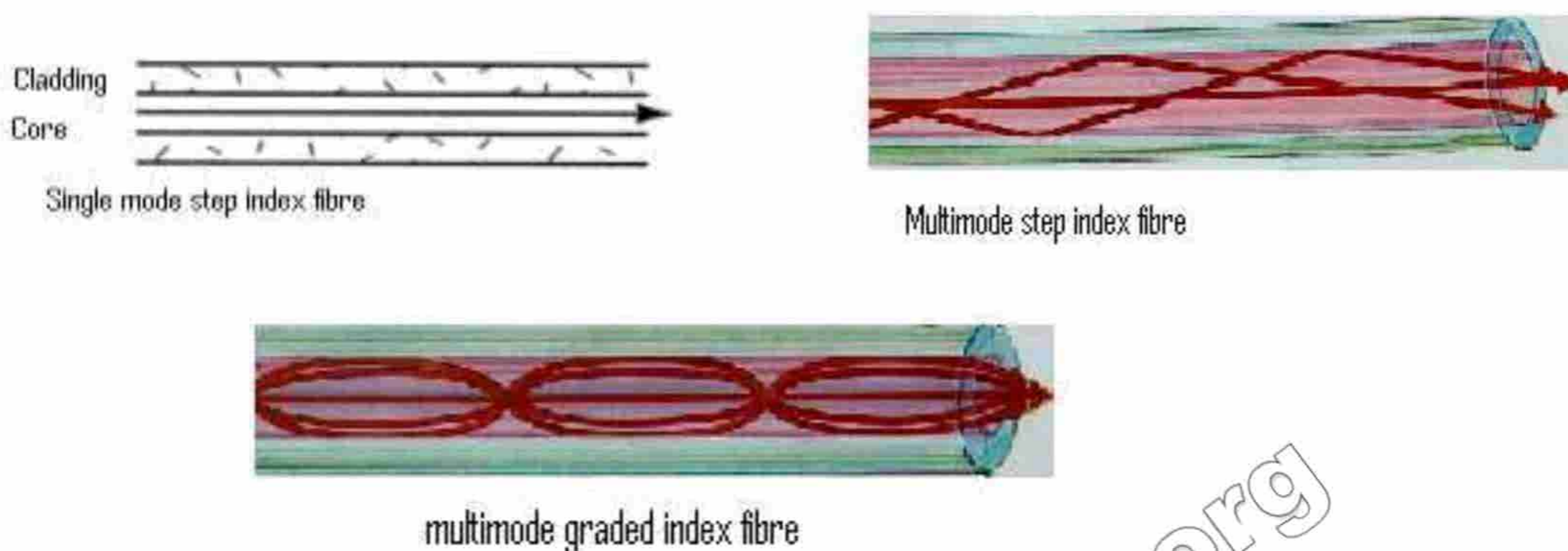
$$\alpha_{\min} = 1.22 \lambda / D,$$

ii) Correct answer is (d) The diameter of the objective lens.

$$\alpha_{\min} = 1.22 \lambda / D,$$

Q.9 *Draw sketches showing the different light paths through a single-mode and multi-mode fibre. Why is the single-mode fibre preferred in telecommunications?*

Ans.



Single-mode fibre is preferred in modern telecommunications because they are digital and use monochromatic laser light. Here the transmission is free from dispersion, and can carry 14 TV channels & 1400 phone calls at the same time.

Q.10 *How the light signal is transmitted through the optical fibre?*

Ans. There are two methods by which the light signal is transmitted through the optical fibre.

- i. By total internal reflection of light signals
- ii. Continuous refraction of light

Fibre optics communication system consists of three major components: **a) A transmitter** which converts electrical signal into light signal, **b) Optical fibre** which guide the signal and **c) a receiver** which receives the light signal and converts to electrical signal.

Q.11 *How the power is lost in optical fibre through dispersion? Explain.*

Ans. There are two major sources for the lost of power:

- i. **Scattering/Dispersion:** Scattering/dispersion of light signal by groups of atoms which are formed at places where fibres are joined together. This loss can be reduced by careful manufacturing of fibre e.g. fibre can be joined by laser.
- ii. **Absorption:** When a light signal travels along fibres by multiple reflections, some light is absorbed due to impurities in the glass. Also at the joints density increases due to which light is absorbed. Careful manufacturing can reduce this power loss too.

Chapter 11

Heat and Thermodynamics

Short Answers

Q.1 *Why is the average velocity of the molecules in a gas zero but the average of the square of velocities is not zero?*

Ans. The molecules of the gas move in random directions. We assume that the same number of molecules move along +x-axis and along -x-axis etc. Therefore average of each component velocity is zero. But the average of the squares of the velocities of the molecules include square of negative velocity and so cannot be zero.

Q.2 *Why does the pressure of a gas in a car tyre increase when it is driven through some distance?*

Ans. In driving, the car tyre becomes hot due to force of friction between road and tyre. This heat goes inside the tyre and increases translational kinetic energy of the molecules of the gas. Since pressure is directly proportional to the average translational kinetic energy of molecules of the gas, therefore pressure of the gas in a tyre increases.

Q.3 *A system undergoes from state $P_1 V_1$ to state $P_2 V_2$ as shown in the fig. What will be the change in internal energy?*

Ans. The change in internal energy (ΔU) will be zero. In the figure the graph is isotherm. It means temperature remain constant. So $\Delta U = 0$

Q.4 *Variation of volume by pressure is given in the fig. A gas is taken along the paths ABCDA, ABCA and A to A. What will be the change in internal energy?*

Ans. In the figure, all three paths returns to the initial state, so there is no change in internal energy.

Q.5 *Specific heat of a gas at constant pressure is greater than specific heat at constant volume. Why?*

Ans. In case of specific heat at constant pressure, a part of heat is used in doing work on piston a part of it is used in raising the temperature of the gas. But in case of specific heat at constant volume all the heat is used in raising the temperature. Since the rise of temperature of the gas in both the cases is same hence C_p is greater than C_v .

Q.6 *Give an example of a process in which no heat is transferred to or from the system but the temperature of the system changes.*

Ans. In adiabatic expansion of a gas, the work is done by the system and so the temperature decreases due expansion of gas. We know that in adiabatic process no heat is transferred to or from the system.

Q.7 *Is it possible to convert internal energy into mechanical energy? Explain with example.*

Ans. Yes it is possible. In adiabatic expansion of a gas internal energy is converted into mechanical energy or work according to following equation:

$$W = -\Delta U$$

Q.8 *Is it possible to construct a heat engine that will not expel heat into the atmosphere?*

Ans. No it is not possible. According to 2nd law of thermodynamics it is not possible to construct a heat engine without a heat sink or cold body to reject a part of heat to it.

Q.9 *A thermos flask containing milk as a system is shaken rapidly. Does the temperature of milk rise?*

Ans. Yes the temperature of the thermos flask will rise. During the shaking the milk work is being done on the molecules of the milk which increase the K.E of the molecules. Since the temperature of the molecules of the milk is directly proportional to the average translational K.E. hence temperature of the milk will rise. $T \propto \langle \text{K.E.} \rangle$

Q.10 *What happens to the temperature of the room, when a air conditioner is left running on a table in the middle of the room?*

Ans. If we ignore the heat produced due the friction between different parts of the air conditioner, the temperature of the room will not change. The reason is that heat absorbs from the room is expelled in the same room. Therefore net temperature of the room will be constant.

Q.11 *Can the mechanical energy be converted completely into heat energy? If so give an example.*

Ans. Yes mechanical energy can be converted into heat energy. In an adiabatic compression, work done on the gas, increases the internal energy, i.e. converting mechanical energy (work) into heat energy (ΔU). i.e. $\Delta U = -W$

Q.12 *Does entropy of a system increases or decreases due to friction?*

Ans. The change in the entropy is given by the formula

$$\Delta S = \Delta Q/T$$

Due friction heat is produced which rises the temperature of the system. The entropy of the system increases, due to friction. As work done against friction changes into heat and this irreversible process increases its entropy.

Q.13 *Give an example of a natural process that involves an increase in entropy.*

Ans. **Melting of ice into water:**

During melting of ice into water the heat Q is transferred to the ice from the surroundings at absolute zero. Since $\Delta S = \Delta Q / T$

Therefore, heat is added to the ice hence Q is +ve and entropy increases.

Q.14 *An adiabatic change is the one in which*

a. No heat is added to or taken out of a system

b. No change of temperature takes place

c. Boyle's law is applicable

d. Pressure and volume remains constant

Ans. Correct answer is (a) No heat is added to or taken out of a system in the adiabatic change.

Q. 15 *Which one of the following process is irreversible?*

a. Slow compressions of an elastic spring

b. Slow evaporation of a substance in an isolated vessel

c. Slow compression of a gas d. A chemical explosion

Ans. Correct answer is (d) a chemical explosion is irreversible process.

Q.16 *An ideal reversible heat engine has*

a. 100 % efficiency

b. Highest efficiency

c. An efficiency, which depends on the nature of working substance

d. None of these.

Ans. Correct answer is (b), an ideal reversible heat engine has highest efficiency. From second law of thermodynamics, a heat engine cannot have 100 % efficiency and is independent of the working substance

